




Name: \_\_\_\_\_

Directions: Cut out the ducks and use them to help you solve the subtraction problems.



$\begin{array}{r} 8 \\ - 4 \\ \hline \end{array}$	$\begin{array}{r} 6 \\ - 1 \\ \hline \end{array}$	$\begin{array}{r} 9 \\ - 3 \\ \hline \end{array}$	$\begin{array}{r} 8 \\ - 8 \\ \hline \end{array}$
$\begin{array}{r} 10 \\ - 2 \\ \hline \end{array}$	$\begin{array}{r} 7 \\ - 4 \\ \hline \end{array}$	$\begin{array}{r} 5 \\ - 3 \\ \hline \end{array}$	$\begin{array}{r} 6 \\ - 3 \\ \hline \end{array}$
$\begin{array}{r} 4 \\ - 2 \\ \hline \end{array}$	$\begin{array}{r} 5 \\ - 0 \\ \hline \end{array}$	$\begin{array}{r} 10 \\ - 5 \\ \hline \end{array}$	$\begin{array}{r} 8 \\ - 7 \\ \hline \end{array}$

